

INTERNATIONAL INDIAN SCHOOL, RIYADH 2015 - 2016


MATHEMATICS

U - KG

Write in Sequence

(1)

171 - 200

(2)

131 - 160




..... K.G GIRLS


1. Add the following

$\begin{array}{r} 0 \\ + 5 \\ \hline \end{array}$	$\begin{array}{r} 8 \\ + 1 \\ \hline \end{array}$
$\begin{array}{r} 2 \\ + 5 \\ \hline \end{array}$	$\begin{array}{r} 6 \\ + 3 \\ \hline \end{array}$
$\begin{array}{r} 4 \\ + 0 \\ \hline \end{array}$	$\begin{array}{r} 8 \\ + 1 \\ \hline \end{array}$



2. Subtract the following

$\begin{array}{r} 9 \\ - 4 \\ \hline \end{array}$	$\begin{array}{r} 8 \\ - 2 \\ \hline \end{array}$
$\begin{array}{r} 4 \\ - 0 \\ \hline \end{array}$	$\begin{array}{r} 2 \\ - 2 \\ \hline \end{array}$
$\begin{array}{r} 5 \\ - 1 \\ \hline \end{array}$	$\begin{array}{r} 7 \\ - 5 \\ \hline \end{array}$




1. Circle the smaller number

3	8
15	5
6	2
18	10
12	20
9	7
4	14
0	1
11	13
12	2
4	5
19	9




2. Circle the greater number

4	9
16	6
7	3
19	11
13	20
10	8
5	15
1	2
12	14
13	3
5	7
20	2



## 1. Write Number Names for given Numbers

80	-
19	-
44	-
100	-
89	-
25	-
16	-
54	-
99	-
72	-
31	-
68	-
70	-
12	-




## 2. Write Numbers for the given Number Names

Thirty three	-
Eighty nine	-
Forty	-
Twelve	-
Fifty five	-
Twenty three	-
One hundred	-
Thirty	-
Thirteen	-
Ninety five	-
Sixty one	-
Nineteen	-
Seventy four	-
Eighteen	-
Two	-
Eleven	-



1. What comes just After ?

12	
0	
11	
9	
5	
13	
8	
1	
19	
3	
10	
14	



2. What comes just Before ?

	8
	19
	1
	20
	13
	5
	17
	6
	2
	11
	4
	9

3. Reverse counting

