

9. What changes its shape

a. Moon ()

b. Sun ()

10. The sun is very

a. Hot ()

b. Cold ()

11. An animal that lives on trees

a. Monkey ()

b. Rabbit ()

12. Our national bird

a. Peacock ()

b. Parrot ()

13. A vehicle that has engine

a. Tonga ()

b. Bus ()

14. A vehicle which is pulled by animals

a. Bullock cart ()

b. Car ()

15. A farmer grows

a. letters ()

b. Food grains ()

VI. MATCH THE FOLLOWING.

A

1. Fish and octopus
2. Bat and monkey
3. Ant and cockroach

insects
live in water
lives in trees

B

1. Means of transport
2. Climbers
3. Bullock – carts
4. Trees
5. Buses and trucks
6. Shrubs
7. Creepers

seen in villages
tall and big plants
run on wheels
need support to stand straight
small and bushy plants
grow along the ground
have six wheels

C

1. Lion
2. Rabbit
3. Snake
4. Birds
5. Dog
6. Cow
7. Horse

nest
hole
den
burrow
stable
kennel
shed

D

1. Rainbow
2. Moon
3. Stars
4. Dark clouds
5. Police man
6. Doctor
7. Barber

twinkle at night
bring rain
changes its shape
seven colours
cuts hair
catches thieves
cures sick people

Answer the following riddles.

1. I am a ball of fire. But you can't play with me. I am hot and bright.

Who am I ?

A. _____

2. We are plenty in number. We twinkle every night

Can you guess our name ?

A. _____

3. I change my shape every night.

Can you guess who am I ?

A. _____

4. I am a band. I have seven colours. But girls can't keep on their hairs.

Who am I ?

A. _____

5. I am bringing rain. Farmers are happy to see me.





Who am I ?

A. _____



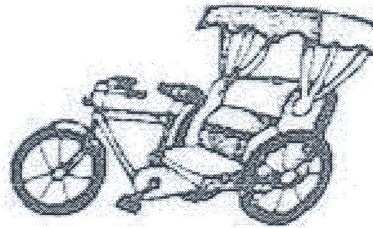
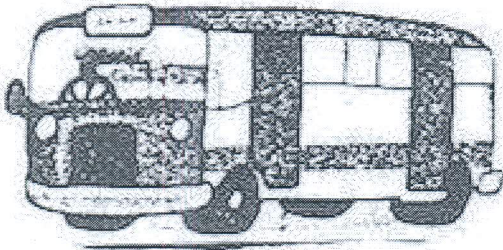
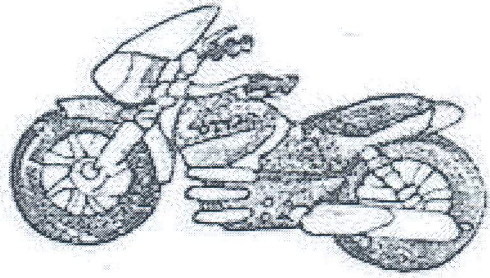

Match the animals with their homes.

- Cow
- Rabbit
- Dog
- Snake
- Monkey
- Bird
- Horse
- kennel
- shed
- barrow
- tree
- hole
- stable
- nest

IDENTIFY THE PLANTS


	
	

Find out the number of wheels each means of transport has. Write it in the box.



NOTE: Underline the correct word and True or False can be asked from any lesson.


IV. LOOK AT THE PICTURES AND COMPLETE THE NAMES OF THE PEOPLE WHO HELP US




1. _____



2. _____



3. _____



4. _____



5. _____



6. _____

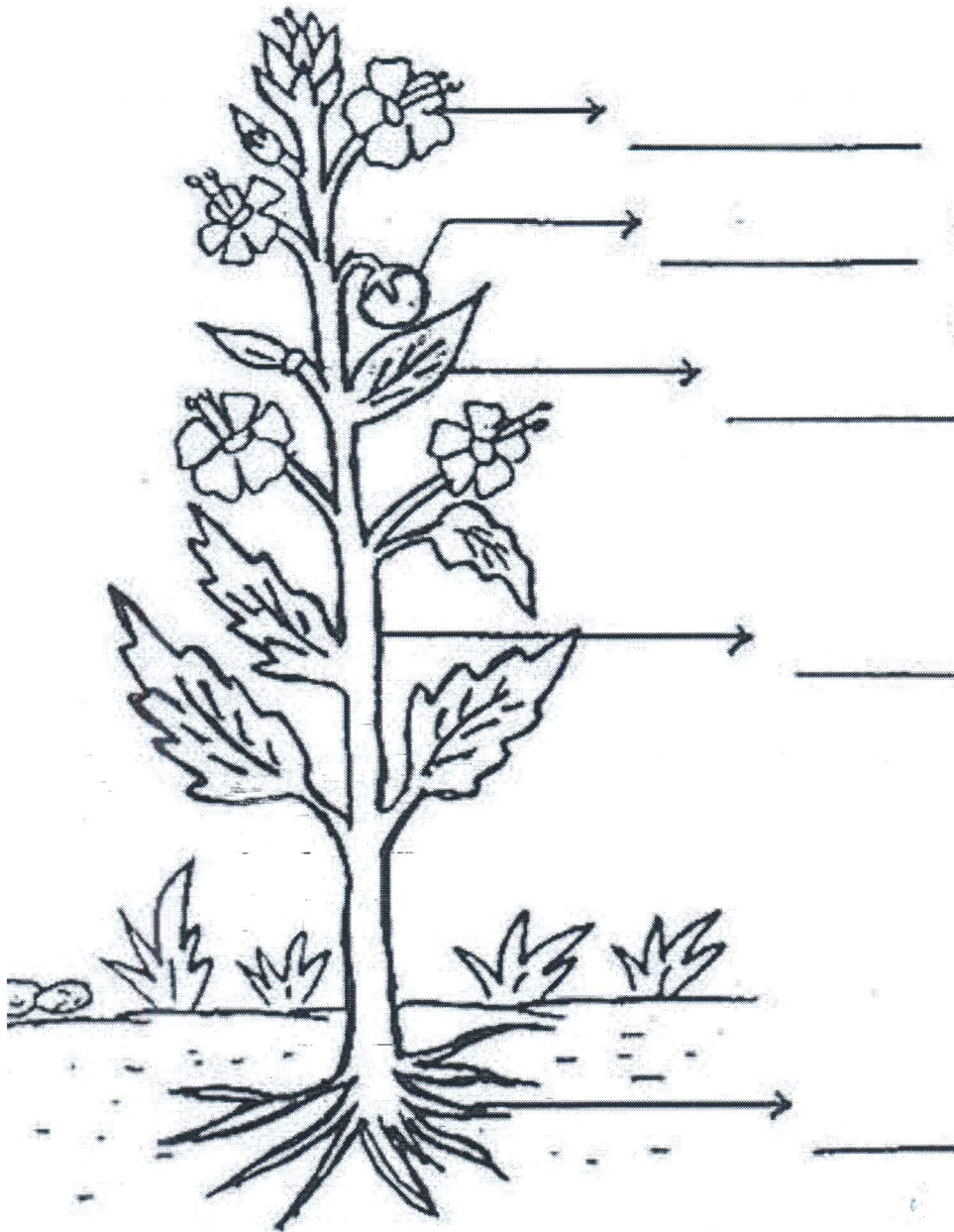


7. _____











8. _____


Label the following parts of the plant.



WRITE (L) FOR LAND ANIMAL, (W) FOR WATER ANIMALS AND (B) FOR THE ANIMALS THAT LIVE BOTH ON LAND AND WATER.



Tick (✓) the products we get from these living things



- (a) Milk
- (b) Bread
- (c) Water



- (a) Wool
- (b) Honey
- (c) Wood



- (a) Egg
- (b) Wool
- (c) Honey



- (a) Silk
- (b) Tea
- (c) Coffee



- (a) Egg
- (b) Sugar
- (c) Wool



- (a) Jam
- (b) Wool
- (c) Meat

Circle the plant products.

